

Candidate's Examination Number**THE REVOLUTIONARY GOVERNMENT OF ZANZIBAR****ZANZIBAR EXAMINATIONS COUNCIL****STANDARD FOUR EXAMINATIONS****MATHEMATICS****TIME 2:30 HOURS TUESDAY 25TH OCTOBER, 2022 A.M****INSTRUCTIONS TO CANDIDATES**

1. This paper consists of TWO (2) sections A and B.
2. Answer ALL questions in section A and B.
3. Write your examination number on each page.
4. Write your answers on the space provided.
5. All answers must be written by a blue or black pen, diagrams must be in pencil.
6. Cellular phones, calculators and unauthorized materials are not allowed in the examination room.

FOR EXAMINER'S USE ONLY

QUESTION NUMBER	MARKS	SIGNATURE	QUESTION NUMBER	MARKS	SIGNATURE
1			14		
2			15		
3			16		
4			17		
5			18		
6			19		
7			20		
8					
9					
10					
11					
12					
13					
TOTAL					
HECKER'S SIGNATURE					



0 2 2 0 0 4 4 6

s paper consists of 12 printed pages**0001 of 0012**

SECTION A: (60 Marks)

Answer ALL questions in this section

1. Write number 75,500 in words.

For examiners' use only

WORK SPACE

2. Use vertical addition to add the following numbers.

$$\begin{array}{r} 336475 \\ + 236475 \\ \hline \end{array}$$

WORK SPACE

3. Use horizontal subtraction to subtract $67893 - 34542$

WORK SPACE

4. Use vertical multiplication to multiply

$$\begin{array}{r} 236 \\ \times 12 \\ \hline \end{array}$$

WORK SPACE

5. Use long division to calculate the quotient and the remainder

$$\begin{array}{r} 5 \overline{) 949} \end{array}$$

WORK SPACE

6. Add the following mixed fraction





$$3\frac{1}{7} + 4\frac{3}{7}$$

WORK SPACE

7. Subtract $40.36 - 7.24$

WORK SPACE

8. Write down the name of each mathematical instrument given in the table below.

 <p>NAME _____</p>	 <p>NAME _____</p>
 <p>NAME: _____</p>	 <p>NAME: _____</p>


9. Convert 7700m into km and m.

WORK SPACE

10. A lorry can carry 6000kg of sand per day. Convert this mass in tones.

WORK SPACE

11. Calculate the area of the rectangle below.



WORK SPACE

12. Convert 23 litres into millilitres.

WORK SPACE

13. The examination started at 8:30 a.m and ended at 11:50 a.m . How long did it take to finish the examination?

WORK SPACE

14. The rice of 1kg is sold at 4000 shillings. How much money you pay to buy 10 kg.

WORK SPACE

15. Simplify the following algebraic expression.

$$2a + a + b + a + 2b$$

WORK SPACE

SECTION B: (40 Marks)

Answer ALL questions in this section.

16. Juma won a swimming game of cash prize sh. 15780. He deposited this money in his bank account. If he had sh. 4500 in his account. What is the total amount of money in his bank account?

WORK SPACE

17. Asha received a salary of shillings 72,000 and spent shillings 35,000. How many shillings did she left?

WORK SPACE

For
examin
ers' use
only

18. A shoe factory manufactured 6525 shoes in 25 days.
How many shoes did it manufacture per day?

WORK SPACE

19. A family consume 5 liters of milk every day. How
many liters did the family consume in 14 days?

WORK SPACE

20. Ali walked a distance of 5.4 km on Saturday and 3.5 km on Sunday. How far did he walked for all two days?

WORK SPACE